

① かさのたんいをけい算しよう。

① 3 L 2 dL + 6 dL = L dL

② 6 L 4 dL + 2 dL = L dL

③ 1 L 2 dL + 1 dL = L dL

④ 4 L 2 dL + 5 dL = L dL

⑤ 7 L 3 dL + 2 dL = L dL



① かさのたんいをけい算しよう。

① 2 L 3 dL + 1 dL = L dL

② 6 L 1 dL + 5 dL = L dL

③ 9 L 2 dL + 5 dL = L dL

④ 5 L 7 dL + 1 dL = L dL

⑤ 9 L 8 dL + 1 dL = L dL





かさのたんいをけい算^{さん}しよう。

$$\textcircled{1} \quad 2 \text{ L} \quad 5 \text{ dL} \quad + \quad 1 \text{ dL} \quad = \quad \text{ L} \quad \text{ dL}$$


$$\textcircled{2} \quad 7 \text{ L} \quad 2 \text{ dL} \quad + \quad 1 \text{ dL} \quad = \quad \text{ L} \quad \text{ dL}$$

$$\textcircled{3} \quad 7 \text{ L} \quad 3 \text{ dL} \quad + \quad 6 \text{ dL} \quad = \quad \text{ L} \quad \text{ dL}$$

$$\textcircled{4} \quad 2 \text{ L} \quad 3 \text{ dL} \quad + \quad 2 \text{ dL} \quad = \quad \text{ L} \quad \text{ dL}$$

$$\textcircled{5} \quad 7 \text{ L} \quad 3 \text{ dL} \quad + \quad 5 \text{ dL} \quad = \quad \text{ L} \quad \text{ dL}$$

じこひょうか



1

かさのたんいをけい算しよう。




$$\textcircled{1} \quad 2 \text{ L} \quad 7 \text{ dL} \quad + \quad 1 \text{ dL} \quad = \quad \text{L} \quad \text{dL}$$

$$\textcircled{2} \quad 7 \text{ L} \quad 2 \text{ dL} \quad + \quad 5 \text{ dL} \quad = \quad \text{L} \quad \text{dL}$$

$$\textcircled{3} \quad 7 \text{ L} \quad 2 \text{ dL} \quad + \quad 2 \text{ dL} \quad = \quad \text{L} \quad \text{dL}$$

$$\textcircled{4} \quad 4 \text{ L} \quad 3 \text{ dL} \quad + \quad 5 \text{ dL} \quad = \quad \text{L} \quad \text{dL}$$

$$\textcircled{5} \quad 8 \text{ L} \quad 7 \text{ dL} \quad + \quad 1 \text{ dL} \quad = \quad \text{L} \quad \text{dL}$$

じこひょうか		
		

④ ①

4 2

8 8

⑤ ②

8 7

8 7

③

7 7

4 4

① かさのたんいをけい算しよう。


① 1 L 2 dL + 4 dL = L dL

② 7 L 1 dL + 5 dL = L dL

③ 5 L 4 dL + 3 dL = L dL

④ 3 L 4 dL + 4 dL = L dL

⑤ 9 L 6 dL + 2 dL = L dL



① かさのたんいをけい算しよう。

$$\textcircled{1} \quad 2 \text{ L} \quad 5 \text{ dL} \quad + \quad 3 \text{ dL} \quad = \quad \text{L} \quad \text{dL}$$

$$\textcircled{2} \quad 5 \text{ L} \quad 4 \text{ dL} \quad + \quad 4 \text{ dL} \quad = \quad \text{L} \quad \text{dL}$$

$$\textcircled{3} \quad 6 \text{ L} \quad 5 \text{ dL} \quad + \quad 4 \text{ dL} \quad = \quad \text{L} \quad \text{dL}$$

$$\textcircled{4} \quad 2 \text{ L} \quad 5 \text{ dL} \quad + \quad 3 \text{ dL} \quad = \quad \text{L} \quad \text{dL}$$

$$\textcircled{5} \quad 7 \text{ L} \quad 6 \text{ dL} \quad + \quad 3 \text{ dL} \quad = \quad \text{L} \quad \text{dL}$$



① かさのたんいをけい算しよう。

① 2 L 2 dL + 5 dL = L dL

② 8 L 4 dL + 1 dL = L dL

③ 1 L 6 dL + 2 dL = L dL

④ 5 L 2 dL + 3 dL = L dL

⑤ 7 L 2 dL + 2 dL = L dL



① かさのたんいをけい算しよう。


① 4 L 5 dL + 4 dL = L dL

② 6 L 3 dL + 4 dL = L dL

③ 7 L 2 dL + 7 dL = L dL

④ 3 L 4 dL + 5 dL = L dL

⑤ 7 L 4 dL + 4 dL = L dL



① かさのたんいをけい算しよう。


① 3 L 4 dL + 3 dL = L dL

② 5 L 2 dL + 2 dL = L dL

③ 1 L 4 dL + 3 dL = L dL

④ 1 L 5 dL + 4 dL = L dL

⑤ 9 L 5 dL + 3 dL = L dL



① かさのたんいをけい算しよう。


① 2 L 2 dL + 1 dL = L dL

② 6 L 3 dL + 3 dL = L dL

③ 3 L 4 dL + 2 dL = L dL

④ 5 L 7 dL + 2 dL = L dL

⑤ 9 L 7 dL + 2 dL = L dL



① かさのたんいをけい算しよう。


① 3 L 3 dL + 2 dL = L dL

② 5 L 4 dL + 3 dL = L dL

③ 6 L 2 dL + 1 dL = L dL

④ 1 L 1 dL + 4 dL = L dL

⑤ 9 L 4 dL + 2 dL = L dL



① かさのたんいをけい算しよう。


① 3 L 3 dL + 4 dL = L dL

② 5 L 1 dL + 7 dL = L dL

③ 4 L 6 dL + 3 dL = L dL

④ 3 L 1 dL + 4 dL = L dL

⑤ 7 L 5 dL + 4 dL = L dL



① かさのたんいをけい算しよう。


① 1 L 3 dL + 2 dL = L dL

② 9 L 1 dL + 7 dL = L dL

③ 8 L 4 dL + 3 dL = L dL

④ 1 L 4 dL + 2 dL = L dL

⑤ 8 L 8 dL + 1 dL = L dL



1

かさのたんいをけい算しよう。


① $4\text{ L } 1\text{ dL} + 2\text{ dL} = \quad \text{L} \quad \text{dL}$

② $7\text{ L } 4\text{ dL} + 1\text{ dL} = \quad \text{L} \quad \text{dL}$

③ $8\text{ L } 3\text{ dL} + 4\text{ dL} = \quad \text{L} \quad \text{dL}$

④ $4\text{ L } 1\text{ dL} + 7\text{ dL} = \quad \text{L} \quad \text{dL}$

⑤ $7\text{ L } 2\text{ dL} + 7\text{ dL} = \quad \text{L} \quad \text{dL}$



① かさのたんいをけい算しよう。

① 3 L 3 dL + 4 dL = L dL

② 5 L 2 dL + 3 dL = L dL

③ 1 L 3 dL + 3 dL = L dL

④ 5 L 5 dL + 2 dL = L dL

⑤ 6 L 6 dL + 1 dL = L dL



① かさのたんいをけい算しよう。


① 3 L 4 dL + 2 dL = L dL

② 5 L 2 dL + 5 dL = L dL

③ 1 L 2 dL + 4 dL = L dL

④ 5 L 5 dL + 2 dL = L dL

⑤ 9 L 8 dL + 1 dL = L dL



① かさのたんいをけい算しよう。


① 2 L 7 dL + 1 dL = L dL

② 8 L 3 dL + 1 dL = L dL

③ 3 L 4 dL + 3 dL = L dL

④ 5 L 5 dL + 2 dL = L dL

⑤ 8 L 5 dL + 1 dL = L dL



① かさのたんいをけい算しよう。

① 2 L 2 dL + 4 dL = L dL

② 9 L 4 dL + 1 dL = L dL

③ 7 L 6 dL + 2 dL = L dL

④ 1 L 2 dL + 4 dL = L dL

⑤ 6 L 6 dL + 1 dL = L dL



① かさのたんいをけい算しよう。


① 4 L 2 dL + 6 dL = L dL

② 9 L 2 dL + 4 dL = L dL

③ 1 L 4 dL + 4 dL = L dL

④ 5 L 1 dL + 4 dL = L dL

⑤ 5 L 2 dL + 1 dL = L dL



① かさのたんいをけい算しよう。


① 1 L 5 dL + 4 dL = L dL

② 8 L 1 dL + 7 dL = L dL

③ 6 L 6 dL + 2 dL = L dL

④ 4 L 5 dL + 1 dL = L dL

⑤ 5 L 4 dL + 5 dL = L dL



① かさのたんいをけい算しよう。


① 4 L 8 dL + 1 dL = L dL

② 8 L 1 dL + 4 dL = L dL

③ 1 L 2 dL + 7 dL = L dL

④ 2 L 6 dL + 2 dL = L dL

⑤ 7 L 3 dL + 3 dL = L dL



① かさのたんいをけい算しよう。


① 2 L 3 dL + 2 dL = L dL

② 7 L 2 dL + 6 dL = L dL

③ 6 L 3 dL + 3 dL = L dL

④ 1 L 5 dL + 1 dL = L dL

⑤ 7 L 4 dL + 3 dL = L dL



① かさのたんいをけい算しよう。

① 3 L 4 dL + 3 dL = L dL

② 6 L 5 dL + 4 dL = L dL

③ 1 L 6 dL + 2 dL = L dL

④ 5 L 1 dL + 1 dL = L dL

⑤ 5 L 7 dL + 2 dL = L dL



① かさのたんいをけい算しよう。

① 1 L 8 dL + 1 dL = L dL

② 7 L 3 dL + 1 dL = L dL

③ 6 L 3 dL + 6 dL = L dL

④ 4 L 1 dL + 2 dL = L dL

⑤ 6 L 5 dL + 1 dL = L dL



① かさのたんいをけい算しよう。


① 2 L 6 dL + 1 dL = L dL

② 5 L 3 dL + 2 dL = L dL

③ 1 L 3 dL + 5 dL = L dL

④ 3 L 7 dL + 1 dL = L dL

⑤ 6 L 2 dL + 5 dL = L dL



1

かさのたんいをけい算しよう。


① 2 L 4 dL + 4 dL = L dL

② 7 L 5 dL + 3 dL = L dL

③ 4 L 3 dL + 6 dL = L dL

④ 5 L 4 dL + 3 dL = L dL

⑤ 9 L 5 dL + 4 dL = L dL



こたえ

④ ①
 5 2
 7 8
 ⑤ ②
 9 7
 9 8
 ③ ③
 4 4
 9 9

① かさのたんいをけい算しよう。


$$\textcircled{1} \quad 3 \text{ L} \quad 5 \text{ dL} \quad + \quad 2 \text{ dL} \quad = \quad \text{L} \quad \text{dL}$$

$$\textcircled{2} \quad 9 \text{ L} \quad 3 \text{ dL} \quad + \quad 2 \text{ dL} \quad = \quad \text{L} \quad \text{dL}$$

$$\textcircled{3} \quad 6 \text{ L} \quad 5 \text{ dL} \quad + \quad 1 \text{ dL} \quad = \quad \text{L} \quad \text{dL}$$

$$\textcircled{4} \quad 5 \text{ L} \quad 3 \text{ dL} \quad + \quad 3 \text{ dL} \quad = \quad \text{L} \quad \text{dL}$$

$$\textcircled{5} \quad 8 \text{ L} \quad 7 \text{ dL} \quad + \quad 1 \text{ dL} \quad = \quad \text{L} \quad \text{dL}$$



① かさのたんいをけい算しよう。


① 3 L 5 dL + 2 dL = L dL

② 6 L 3 dL + 4 dL = L dL

③ 3 L 2 dL + 2 dL = L dL

④ 3 L 2 dL + 3 dL = L dL

⑤ 6 L 7 dL + 2 dL = L dL



① かさのたんいをけい算しよう。


① 2 L 1 dL + 3 dL = L dL

② 7 L 3 dL + 4 dL = L dL

③ 2 L 6 dL + 1 dL = L dL

④ 4 L 4 dL + 2 dL = L dL

⑤ 9 L 7 dL + 1 dL = L dL



1

かさのたんいをけい算しよう。

① 1 L 8 dL + 1 dL = L dL

② 6 L 3 dL + 3 dL = L dL

③ 3 L 3 dL + 6 dL = L dL

④ 5 L 3 dL + 6 dL = L dL

⑤ 8 L 5 dL + 1 dL = L dL

じこひょうか		
