

① かさのたんいをけい算しよう。


① 2 L 1 dL + 1 L = L dL

② 6 L 9 dL + 8 L = L dL

③ 5 L 1 dL + 5 L = L dL

④ 1 L 9 dL + 4 L = L dL

⑤ 6 L 1 dL + 8 L = L dL



① かさのたんいをけい算しよう。


① 4 L 5 dL + 4 L = L dL

② 6 L 7 dL + 5 L = L dL

③ 9 L 2 dL + 6 L = L dL

④ 1 L 8 dL + 1 L = L dL

⑤ 3 L 2 dL + 1 L = L dL



① かさのたんいをけい算しよう。


① 4 L 7 dL + 5 L = L dL

② 9 L 8 dL + 2 L = L dL

③ 8 L 1 dL + 2 L = L dL

④ 4 L 5 dL + 3 L = L dL

⑤ 2 L 5 dL + 1 L = L dL



① かさのたんいをけい算しよう。




$$\textcircled{1} \quad 4 \text{ L} \quad 3 \text{ dL} \quad + \quad 3 \text{ L} \quad = \quad \text{L} \quad \text{dL}$$

$$\textcircled{2} \quad 6 \text{ L} \quad 3 \text{ dL} \quad + \quad 9 \text{ L} \quad = \quad \text{L} \quad \text{dL}$$

$$\textcircled{3} \quad 3 \text{ L} \quad 3 \text{ dL} \quad + \quad 1 \text{ L} \quad = \quad \text{L} \quad \text{dL}$$

$$\textcircled{4} \quad 1 \text{ L} \quad 8 \text{ dL} \quad + \quad 2 \text{ L} \quad = \quad \text{L} \quad \text{dL}$$

$$\textcircled{5} \quad 7 \text{ L} \quad 2 \text{ dL} \quad + \quad 2 \text{ L} \quad = \quad \text{L} \quad \text{dL}$$

じこひょうか		
		

① かさのたんいをけい算しよう。


① 3 L 5 dL + 5 L = L dL

② 5 L 4 dL + 3 L = L dL

③ 2 L 9 dL + 4 L = L dL

④ 1 L 5 dL + 1 L = L dL

⑤ 4 L 7 dL + 9 L = L dL



① かさのたんいをけい算しよう。


① 2 L 4 dL + 3 L = L dL

② 5 L 9 dL + 5 L = L dL

③ 1 L 8 dL + 2 L = L dL

④ 3 L 8 dL + 3 L = L dL

⑤ 6 L 9 dL + 4 L = L dL



① かさのたんいをけい算しよう。




① 2 L 5 dL + 2 L = L dL

② 5 L 2 dL + 9 L = L dL

③ 1 L 7 dL + 9 L = L dL

④ 5 L 8 dL + 4 L = L dL

⑤ 3 L 9 dL + 1 L = L dL

じこひょうか		
		

① かさのたんいをけい算しよう。

① 3 L 4 dL + 1 L = L dL

② 9 L 1 dL + 2 L = L dL

③ 5 L 2 dL + 7 L = L dL

④ 2 L 5 dL + 3 L = L dL

⑤ 4 L 2 dL + 1 L = L dL



① かさのたんいをけい算しよう。

① 2 L 6 dL + 1 L = L dL

② 8 L 6 dL + 7 L = L dL

③ 1 L 6 dL + 3 L = L dL

④ 3 L 3 dL + 1 L = L dL

⑤ 3 L 8 dL + 8 L = L dL



① かさのたんいをけい算しよう。


① 2 L 4 dL + 3 L = L dL

② 9 L 1 dL + 3 L = L dL

③ 3 L 4 dL + 5 L = L dL

④ 1 L 2 dL + 4 L = L dL

⑤ 6 L 9 dL + 1 L = L dL



① かさのたんいをけい算しよう。


① 2 L 6 dL + 3 L = L dL

② 7 L 2 dL + 7 L = L dL

③ 5 L 6 dL + 8 L = L dL

④ 2 L 3 dL + 1 L = L dL

⑤ 4 L 5 dL + 3 L = L dL



① かさのたんいをけい算しよう。


① 1 L 3 dL + 1 L = L dL

② 6 L 7 dL + 1 L = L dL

③ 9 L 6 dL + 3 L = L dL

④ 4 L 7 dL + 2 L = L dL

⑤ 3 L 2 dL + 7 L = L dL



① かさのたんいをけい算しよう。


① 4 L 7 dL + 1 L = L dL

② 9 L 4 dL + 4 L = L dL

③ 3 L 1 dL + 3 L = L dL

④ 2 L 4 dL + 3 L = L dL

⑤ 6 L 3 dL + 2 L = L dL



1

かさのたんいをけい算しよう。

① 1 L 8 dL + 2 L = L dL


② 9 L 6 dL + 3 L = L dL

③ 8 L 9 dL + 6 L = L dL

④ 5 L 7 dL + 3 L = L dL

⑤ 5 L 9 dL + 2 L = L dL

じこひょうか



① かさのたんいをけい算しよう。

① 1 L 3 dL + 3 L = L dL

② 5 L 8 dL + 6 L = L dL

③ 5 L 1 dL + 5 L = L dL

④ 5 L 3 dL + 3 L = L dL

⑤ 3 L 7 dL + 4 L = L dL



① かさのたんいをけい算しよう。

① 4 L 4 dL + 2 L = L dL

② 5 L 2 dL + 7 L = L dL

③ 3 L 5 dL + 5 L = L dL

④ 5 L 7 dL + 1 L = L dL

⑤ 7 L 1 dL + 9 L = L dL



① かさのたんいをけい算しよう。


① 3 L 5 dL + 1 L = L dL

② 7 L 9 dL + 6 L = L dL

③ 3 L 7 dL + 9 L = L dL

④ 5 L 1 dL + 2 L = L dL

⑤ 5 L 4 dL + 4 L = L dL



① かさのたんいをけい算しよう。

① 4 L 8 dL + 5 L = L dL

② 7 L 6 dL + 5 L = L dL

③ 3 L 3 dL + 1 L = L dL

④ 4 L 6 dL + 2 L = L dL

⑤ 4 L 2 dL + 3 L = L dL



① かさのたんいをけい算しよう。


① 3 L 4 dL + 4 L = L dL

② 8 L 2 dL + 6 L = L dL

③ 9 L 4 dL + 1 L = L dL

④ 5 L 4 dL + 4 L = L dL

⑤ 4 L 1 dL + 6 L = L dL



① かさのたんいをけい算しよう。


① 2 L 2 dL + 3 L = L dL

② 5 L 3 dL + 2 L = L dL

③ 8 L 8 dL + 9 L = L dL

④ 2 L 3 dL + 4 L = L dL

⑤ 6 L 1 dL + 2 L = L dL



① かさのたんいをけい算しよう。


① 4 L 6 dL + 5 L = L dL

② 6 L 8 dL + 8 L = L dL

③ 7 L 3 dL + 3 L = L dL

④ 2 L 4 dL + 1 L = L dL

⑤ 3 L 2 dL + 7 L = L dL



① かさのたんいをけい算しよう。

① 2 L 1 dL + 4 L = L dL

② 9 L 7 dL + 5 L = L dL

③ 5 L 8 dL + 6 L = L dL

④ 3 L 4 dL + 2 L = L dL

⑤ 5 L 1 dL + 3 L = L dL



① かさのたんいをけい算しよう。

① 3 L 8 dL + 3 L = L dL

② 9 L 9 dL + 1 L = L dL

③ 1 L 7 dL + 3 L = L dL

④ 4 L 8 dL + 1 L = L dL

⑤ 6 L 4 dL + 6 L = L dL



① かさのたんいをけい算しよう。

$$\textcircled{1} \quad 3 \text{ L} \quad 7 \text{ dL} \quad + \quad 1 \text{ L} \quad = \quad \text{L} \quad \text{dL}$$

$$\textcircled{2} \quad 7 \text{ L} \quad 1 \text{ dL} \quad + \quad 1 \text{ L} \quad = \quad \text{L} \quad \text{dL}$$

$$\textcircled{3} \quad 9 \text{ L} \quad 9 \text{ dL} \quad + \quad 2 \text{ L} \quad = \quad \text{L} \quad \text{dL}$$

$$\textcircled{4} \quad 3 \text{ L} \quad 7 \text{ dL} \quad + \quad 2 \text{ L} \quad = \quad \text{L} \quad \text{dL}$$

$$\textcircled{5} \quad 6 \text{ L} \quad 8 \text{ dL} \quad + \quad 2 \text{ L} \quad = \quad \text{L} \quad \text{dL}$$



① かさのたんいをけい算しよう。

① 2 L 7 dL + 2 L = L dL

② 8 L 8 dL + 4 L = L dL

③ 3 L 8 dL + 9 L = L dL

④ 2 L 8 dL + 3 L = L dL

⑤ 3 L 5 dL + 8 L = L dL



① かさのたんいをけい算しよう。


① 1 L 6 dL + 4 L = L dL

② 8 L 1 dL + 3 L = L dL

③ 5 L 3 dL + 2 L = L dL

④ 4 L 7 dL + 1 L = L dL

⑤ 4 L 9 dL + 6 L = L dL



① かさのたんいをけい算しよう。


① 3 L 2 dL + 3 L = L dL

② 9 L 9 dL + 5 L = L dL

③ 2 L 6 dL + 2 L = L dL

④ 1 L 5 dL + 2 L = L dL

⑤ 7 L 2 dL + 5 L = L dL



① かさのたんいをけい算しよう。


① 4 L 7 dL + 1 L = L dL

② 6 L 6 dL + 2 L = L dL

③ 3 L 1 dL + 1 L = L dL

④ 1 L 9 dL + 3 L = L dL

⑤ 4 L 1 dL + 1 L = L dL



① かさのたんいをけい算しよう。


① 1 L 2 dL + 2 L = L dL

② 9 L 1 dL + 3 L = L dL

③ 2 L 7 dL + 4 L = L dL

④ 2 L 7 dL + 3 L = L dL

⑤ 4 L 1 dL + 1 L = L dL



① かさのたんいをけい算しよう。

① 1 L 5 dL + 5 L = L dL

② 7 L 2 dL + 4 L = L dL

③ 4 L 5 dL + 3 L = L dL

④ 1 L 1 dL + 4 L = L dL

⑤ 5 L 5 dL + 3 L = L dL

