

1

かさのたんいをけい算しよう。

① $3\text{ L } 4\text{ dL} - 3\text{ dL} = \quad \text{L} \quad \text{dL}$


② $9\text{ L } 7\text{ dL} - 1\text{ dL} = \quad \text{L} \quad \text{dL}$

③ $4\text{ L } 3\text{ dL} - 1\text{ dL} = \quad \text{L} \quad \text{dL}$

④ $1\text{ L } 8\text{ dL} - 5\text{ dL} = \quad \text{L} \quad \text{dL}$

⑤ $7\text{ L } 6\text{ dL} - 2\text{ dL} = \quad \text{L} \quad \text{dL}$

じこひょうか



かさのたんい(6)

-

こたえ

④ ①

1 3

3 1

⑤ ②

7 9

4 6

③

4

2

1

かさのたんいをけい算しよう。

① 4 L 4 dL - 1 dL = L dL


② 9 L 6 dL - 5 dL = L dL

③ 5 L 6 dL - 3 dL = L dL

④ 2 L 9 dL - 1 dL = L dL

⑤ 6 L 5 dL - 2 dL = L dL

じこひょうか



1

かさのたんいをけい算しよう。




① $2\text{ L } 7\text{ dL} - 5\text{ dL} = \quad \text{L} \quad \text{dL}$

② $8\text{ L } 7\text{ dL} - 7\text{ dL} = \quad \text{L}$

③ $7\text{ L } 3\text{ dL} - 1\text{ dL} = \quad \text{L} \quad \text{dL}$

④ $1\text{ L } 8\text{ dL} - 8\text{ dL} = \quad \text{L}$

⑤ $8\text{ L } 5\text{ dL} - 5\text{ dL} = \quad \text{L}$

じこひょうか		
		

④ ①

1 2

2

⑤ ②

8 8

③

7

2

1

かさのたんいをけい算しよう。

① $4\text{ L } 4\text{ dL} - 3\text{ dL} = \quad \text{L} \quad \text{dL}$

② $8\text{ L } 2\text{ dL} - 2\text{ dL} = \quad \text{L}$

③ $9\text{ L } 7\text{ dL} - 4\text{ dL} = \quad \text{L} \quad \text{dL}$

④ $3\text{ L } 8\text{ dL} - 5\text{ dL} = \quad \text{L} \quad \text{dL}$

⑤ $7\text{ L } 2\text{ dL} - 1\text{ dL} = \quad \text{L} \quad \text{dL}$

じこひょうか



4

かさのたんい(6)

こたえ

④ ①

3 4

3 1

⑤ ②

7 8

1

③

9

3

1

かさのたんいをけい算しよう。

① 1 L 8 dL - 6 dL = L dL


② 7 L 6 dL - 6 dL = L

③ 7 L 6 dL - 6 dL = L

④ 1 L 4 dL - 2 dL = L dL

⑤ 5 L 8 dL - 6 dL = L dL

じこひょうか



5

かさのたんい(6)

こたえ

④ ①

1 1

2 2

⑤ ②

5 7

2

③

7

1

かさのたんいをけい算しよう。

① 3 L 9 dL - 6 dL = L dL


② 7 L 3 dL - 1 dL = L dL

③ 1 L 3 dL - 3 dL = L

④ 5 L 4 dL - 3 dL = L dL

⑤ 8 L 5 dL - 2 dL = L dL

じこひょうか



1

かさのたんいをけい算しよう。




① $2\text{ L } 4\text{ dL} - 3\text{ dL} = \quad \text{L} \quad \text{dL}$

② $6\text{ L } 5\text{ dL} - 2\text{ dL} = \quad \text{L} \quad \text{dL}$

③ $1\text{ L } 8\text{ dL} - 5\text{ dL} = \quad \text{L} \quad \text{dL}$

④ $4\text{ L } 5\text{ dL} - 3\text{ dL} = \quad \text{L} \quad \text{dL}$

⑤ $5\text{ L } 8\text{ dL} - 6\text{ dL} = \quad \text{L} \quad \text{dL}$

じこひょうか		
		

1

かさのたんいをけい算しよう。

① $3 \text{ L } 9 \text{ dL} - 9 \text{ dL} = \quad \text{L}$


② $9 \text{ L } 4 \text{ dL} - 2 \text{ dL} = \quad \text{L} \quad \text{dL}$

③ $1 \text{ L } 8 \text{ dL} - 5 \text{ dL} = \quad \text{L} \quad \text{dL}$

④ $3 \text{ L } 5 \text{ dL} - 4 \text{ dL} = \quad \text{L} \quad \text{dL}$

⑤ $9 \text{ L } 2 \text{ dL} - 1 \text{ dL} = \quad \text{L} \quad \text{dL}$

じこひょうか



1

かさのたんいをけい算しよう。



① 1 L 9 dL - 2 dL = L dL

② 7 L 5 dL - 2 dL = L dL

③ 6 L 3 dL - 3 dL = L

④ 3 L 6 dL - 1 dL = L dL

⑤ 8 L 9 dL - 7 dL = L dL

じこひょうか		
		

9

かさのたんい(6)

こたえ

④ ①
3 1
5 7
⑤ ②
8 7
2 3
6 ③

1

かさのたんいをけい算しよう。


① $4 \text{ L } 9 \text{ dL} - 2 \text{ dL} = \quad \text{L} \quad \text{dL}$

② $8 \text{ L } 4 \text{ dL} - 4 \text{ dL} = \quad \text{L}$

③ $4 \text{ L } 6 \text{ dL} - 3 \text{ dL} = \quad \text{L} \quad \text{dL}$

④ $2 \text{ L } 2 \text{ dL} - 1 \text{ dL} = \quad \text{L} \quad \text{dL}$

⑤ $6 \text{ L } 9 \text{ dL} - 3 \text{ dL} = \quad \text{L} \quad \text{dL}$



1

かさのたんいをけい算しよう。

① 1 L 7 dL - 2 dL = L dL


② 6 L 4 dL - 1 dL = L dL

③ 1 L 5 dL - 5 dL = L

④ 4 L 9 dL - 3 dL = L dL

⑤ 5 L 6 dL - 3 dL = L dL

じこひょうか



かさのたんい(6)

11

こたえ

④ 1 ①
 4 1
 6 5
 ⑤ 2 ②
 5 6
 3 3
 ③ 1

1

かさのたんいをけい算しよう。

① $2\text{ L } 7\text{ dL} - 1\text{ dL} = \quad \text{L} \quad \text{dL}$

② $7\text{ L } 6\text{ dL} - 2\text{ dL} = \quad \text{L} \quad \text{dL}$

③ $5\text{ L } 8\text{ dL} - 1\text{ dL} = \quad \text{L} \quad \text{dL}$

④ $1\text{ L } 5\text{ dL} - 4\text{ dL} = \quad \text{L} \quad \text{dL}$

⑤ $6\text{ L } 8\text{ dL} - 8\text{ dL} = \quad \text{L}$

じこひょうか



1

かさのたんいをけい算しよう。


① 1 L 4 dL - 3 dL = L dL

② 9 L 8 dL - 7 dL = L dL

③ 6 L 9 dL - 4 dL = L dL

④ 1 L 6 dL - 6 dL = L

⑤ 8 L 2 dL - 1 dL = L dL



④ ①
 ⑤ ②
 ③

こたえ

1

かさのたんいをけい算しよう。

① 1 L 8 dL - 2 dL = L dL


② 8 L 9 dL - 2 dL = L dL

③ 6 L 3 dL - 3 dL = L

④ 1 L 9 dL - 8 dL = L dL

⑤ 6 L 6 dL - 2 dL = L dL

じこひょうか



1

かさのたんいをけい算しよう。

① $3\text{ L } 6\text{ dL} - 1\text{ dL} = \quad \text{L} \quad \text{dL}$


② $5\text{ L } 8\text{ dL} - 3\text{ dL} = \quad \text{L} \quad \text{dL}$

③ $4\text{ L } 3\text{ dL} - 1\text{ dL} = \quad \text{L} \quad \text{dL}$

④ $3\text{ L } 6\text{ dL} - 2\text{ dL} = \quad \text{L} \quad \text{dL}$

⑤ $8\text{ L } 2\text{ dL} - 1\text{ dL} = \quad \text{L} \quad \text{dL}$

じこひょうか



1

かさのたんいをけい算しよう。

① 4 L 7 dL - 1 dL = L dL


② 6 L 4 dL - 1 dL = L dL

③ 6 L 6 dL - 3 dL = L dL

④ 2 L 8 dL - 7 dL = L dL

⑤ 6 L 8 dL - 3 dL = L dL

じこひょうか



① かさのたんいをけい算しよう。


① 4 L 7 dL - 3 dL = L dL

② 6 L 9 dL - 4 dL = L dL

③ 8 L 9 dL - 7 dL = L dL

④ 5 L 2 dL - 2 dL = L

⑤ 5 L 5 dL - 3 dL = L dL



1

かさのたんいをけい算しよう。


① 1 L 7 dL - 7 dL = L

② 6 L 3 dL - 2 dL = L dL

③ 9 L 8 dL - 6 dL = L dL

④ 3 L 9 dL - 6 dL = L dL

⑤ 9 L 2 dL - 1 dL = L dL



1

かさのたんいをけい算しよう。


① $4\text{ L } 4\text{ dL} - 1\text{ dL} = \quad \text{L} \quad \text{dL}$

② $6\text{ L } 2\text{ dL} - 1\text{ dL} = \quad \text{L} \quad \text{dL}$

③ $6\text{ L } 9\text{ dL} - 5\text{ dL} = \quad \text{L} \quad \text{dL}$

④ $1\text{ L } 5\text{ dL} - 5\text{ dL} = \quad \text{L}$

⑤ $9\text{ L } 6\text{ dL} - 4\text{ dL} = \quad \text{L} \quad \text{dL}$



1

かさのたんいをけい算しよう。

① 1 L 5 dL - 5 dL = L


② 9 L 4 dL - 2 dL = L dL

③ 5 L 7 dL - 2 dL = L dL

④ 5 L 4 dL - 2 dL = L dL

⑤ 6 L 6 dL - 6 dL = L

じこひょうか



1

かさのたんいをけい算しよう。

$$\textcircled{1} 1 \text{ L } 9 \text{ dL} - 1 \text{ dL} = \quad \text{L} \quad \text{dL}$$

$$\textcircled{2} 7 \text{ L } 7 \text{ dL} - 2 \text{ dL} = \quad \text{L} \quad \text{dL}$$

$$\textcircled{3} 7 \text{ L } 8 \text{ dL} - 8 \text{ dL} = \quad \text{L}$$

$$\textcircled{4} 4 \text{ L } 2 \text{ dL} - 2 \text{ dL} = \quad \text{L}$$

$$\textcircled{5} 8 \text{ L } 6 \text{ dL} - 2 \text{ dL} = \quad \text{L} \quad \text{dL}$$



① かさのたんいをけい算しよう。




$$\textcircled{1} \quad 3 \text{ L} \quad 8 \text{ dL} \quad - \quad 1 \text{ dL} \quad = \quad \text{L} \quad \text{dL}$$

$$\textcircled{2} \quad 6 \text{ L} \quad 5 \text{ dL} \quad - \quad 3 \text{ dL} \quad = \quad \text{L} \quad \text{dL}$$

$$\textcircled{3} \quad 9 \text{ L} \quad 7 \text{ dL} \quad - \quad 6 \text{ dL} \quad = \quad \text{L} \quad \text{dL}$$

$$\textcircled{4} \quad 3 \text{ L} \quad 6 \text{ dL} \quad - \quad 1 \text{ dL} \quad = \quad \text{L} \quad \text{dL}$$

$$\textcircled{5} \quad 9 \text{ L} \quad 3 \text{ dL} \quad - \quad 1 \text{ dL} \quad = \quad \text{L} \quad \text{dL}$$

じこひょうか		
		

① かさのたんいをけい算しよう。

① 4 L 5 dL - 2 dL = L dL

② 7 L 8 dL - 5 dL = L dL

③ 2 L 7 dL - 5 dL = L dL

④ 2 L 6 dL - 6 dL = L

⑤ 7 L 5 dL - 4 dL = L dL



1

かさのたんいをけい算しよう。

① 1 L 8 dL - 1 dL = L dL

② 9 L 2 dL - 1 dL = L dL

③ 9 L 2 dL - 1 dL = L dL

④ 3 L 6 dL - 6 dL = L

⑤ 9 L 2 dL - 1 dL = L dL



④ ①

3 1

7

⑤ ②

9 9

1

③

9

1

1

かさのたんいをけい算しよう。


① $3 \text{ L } 5 \text{ dL} - 2 \text{ dL} = \quad \text{L} \quad \text{dL}$

② $7 \text{ L } 8 \text{ dL} - 1 \text{ dL} = \quad \text{L} \quad \text{dL}$

③ $4 \text{ L } 8 \text{ dL} - 4 \text{ dL} = \quad \text{L} \quad \text{dL}$

④ $3 \text{ L } 6 \text{ dL} - 6 \text{ dL} = \quad \text{L}$

⑤ $5 \text{ L } 5 \text{ dL} - 1 \text{ dL} = \quad \text{L} \quad \text{dL}$



① かさのたんいをけい算しよう。

① 1 L 8 dL - 4 dL = L dL

② 6 L 7 dL - 4 dL = L dL

③ 8 L 2 dL - 1 dL = L dL

④ 4 L 6 dL - 6 dL = L

⑤ 9 L 9 dL - 5 dL = L dL



1 ① かさのたんいをけい算しよう。




① 1 L 9 dL - 2 dL = L dL

② 7 L 4 dL - 1 dL = L dL

③ 7 L 9 dL - 4 dL = L dL

④ 3 L 6 dL - 5 dL = L dL

⑤ 7 L 5 dL - 4 dL = L dL

じこひょうか		
		

① かさのたんいをけい算しよう。


$$\textcircled{1} \quad 2 \text{ L} \quad 6 \text{ dL} \quad - \quad 5 \text{ dL} \quad = \quad \text{L} \quad \text{dL}$$

$$\textcircled{2} \quad 7 \text{ L} \quad 9 \text{ dL} \quad - \quad 3 \text{ dL} \quad = \quad \text{L} \quad \text{dL}$$

$$\textcircled{3} \quad 8 \text{ L} \quad 5 \text{ dL} \quad - \quad 5 \text{ dL} \quad = \quad \text{L}$$

$$\textcircled{4} \quad 2 \text{ L} \quad 9 \text{ dL} \quad - \quad 1 \text{ dL} \quad = \quad \text{L} \quad \text{dL}$$

$$\textcircled{5} \quad 8 \text{ L} \quad 9 \text{ dL} \quad - \quad 5 \text{ dL} \quad = \quad \text{L} \quad \text{dL}$$



1

かさのたんいをけい算しよう。




① 1 L 2 dL - 2 dL = L

② 7 L 5 dL - 1 dL = L dL

③ 4 L 2 dL - 2 dL = L

④ 1 L 4 dL - 1 dL = L dL

⑤ 8 L 7 dL - 3 dL = L dL

じこひょうか		
		

④ 1

1

3

⑤ 2

7

4

③ 4

4



かさのたんいをけい算しよう。

$$\textcircled{1} \quad 2 \text{ L} \quad 9 \text{ dL} \quad - \quad 9 \text{ dL} \quad = \quad \text{L}$$

$$\textcircled{2} \quad 7 \text{ L} \quad 6 \text{ dL} \quad - \quad 5 \text{ dL} \quad = \quad \text{L} \quad \text{dL}$$

$$\textcircled{3} \quad 9 \text{ L} \quad 9 \text{ dL} \quad - \quad 2 \text{ dL} \quad = \quad \text{L} \quad \text{dL}$$

$$\textcircled{4} \quad 5 \text{ L} \quad 2 \text{ dL} \quad - \quad 2 \text{ dL} \quad = \quad \text{L}$$

$$\textcircled{5} \quad 5 \text{ L} \quad 2 \text{ dL} \quad - \quad 2 \text{ dL} \quad = \quad \text{L}$$

