

① かさのたんいをけい算しよう。




① 3 L 8 dL - 5 dL =            L            dL

② 7 L 8 dL - 7 dL =            L            dL

③ 1 L 9 dL - 1 dL =            L            dL

④ 2 L 5 dL - 2 dL =            L            dL

⑤ 9 L 5 dL - 5 dL =            L

じこひょうか		
		

① かさのたんいをけい算しよう。


$$\textcircled{1} \quad 3 \text{ L} \quad 6 \text{ dL} \quad - \quad 3 \text{ dL} \quad = \quad \text{L} \quad \text{dL}$$

$$\textcircled{2} \quad 5 \text{ L} \quad 7 \text{ dL} \quad - \quad 1 \text{ dL} \quad = \quad \text{L} \quad \text{dL}$$

$$\textcircled{3} \quad 8 \text{ L} \quad 8 \text{ dL} \quad - \quad 5 \text{ dL} \quad = \quad \text{L} \quad \text{dL}$$

$$\textcircled{4} \quad 4 \text{ L} \quad 7 \text{ dL} \quad - \quad 6 \text{ dL} \quad = \quad \text{L} \quad \text{dL}$$

$$\textcircled{5} \quad 8 \text{ L} \quad 7 \text{ dL} \quad - \quad 6 \text{ dL} \quad = \quad \text{L} \quad \text{dL}$$



① かさのたんいをけい算しよう。


$$\textcircled{1} \quad 3 \text{ L} \quad 9 \text{ dL} \quad - \quad 3 \text{ dL} \quad = \quad \text{L} \quad \text{dL}$$

$$\textcircled{2} \quad 8 \text{ L} \quad 3 \text{ dL} \quad - \quad 1 \text{ dL} \quad = \quad \text{L} \quad \text{dL}$$

$$\textcircled{3} \quad 4 \text{ L} \quad 6 \text{ dL} \quad - \quad 3 \text{ dL} \quad = \quad \text{L} \quad \text{dL}$$

$$\textcircled{4} \quad 4 \text{ L} \quad 7 \text{ dL} \quad - \quad 4 \text{ dL} \quad = \quad \text{L} \quad \text{dL}$$

$$\textcircled{5} \quad 6 \text{ L} \quad 6 \text{ dL} \quad - \quad 5 \text{ dL} \quad = \quad \text{L} \quad \text{dL}$$



① かさのたんいをけい算しよう。

$$\textcircled{1} \quad 4 \text{ L} \quad 3 \text{ dL} \quad - \quad 3 \text{ dL} \quad = \quad \text{L}$$

$$\textcircled{2} \quad 7 \text{ L} \quad 3 \text{ dL} \quad - \quad 2 \text{ dL} \quad = \quad \text{L} \quad \text{dL}$$

$$\textcircled{3} \quad 2 \text{ L} \quad 9 \text{ dL} \quad - \quad 3 \text{ dL} \quad = \quad \text{L} \quad \text{dL}$$

$$\textcircled{4} \quad 1 \text{ L} \quad 3 \text{ dL} \quad - \quad 2 \text{ dL} \quad = \quad \text{L} \quad \text{dL}$$

$$\textcircled{5} \quad 7 \text{ L} \quad 7 \text{ dL} \quad - \quad 7 \text{ dL} \quad = \quad \text{L}$$



① かさのたんいをけい算しよう。




① 3 L 8 dL - 2 dL =            L            dL

② 8 L 6 dL - 1 dL =            L            dL

③ 5 L 8 dL - 7 dL =            L            dL

④ 3 L 8 dL - 3 dL =            L            dL

⑤ 6 L 3 dL - 2 dL =            L            dL

じこひょうか		
		

① かさのたんいをけい算しよう。


① 4 L 2 dL - 2 dL = L

② 7 L 3 dL - 1 dL = L dL

③ 6 L 7 dL - 4 dL = L dL

④ 2 L 2 dL - 1 dL = L dL

⑤ 6 L 2 dL - 1 dL = L dL



① かさのたんいをけい算しよう。



① 4 L 2 dL - 1 dL =          L          dL

② 9 L 9 dL - 3 dL =          L          dL

③ 2 L 2 dL - 1 dL =          L          dL

④ 3 L 9 dL - 5 dL =          L          dL

⑤ 9 L 9 dL - 9 dL =          L

じこひょうか		
		







① かさのたんいをけい算しよう。

$$\textcircled{1} \quad 3 \text{ L} \quad 8 \text{ dL} \quad - \quad 2 \text{ dL} \quad = \quad \text{L} \quad \text{dL}$$

$$\textcircled{2} \quad 8 \text{ L} \quad 4 \text{ dL} \quad - \quad 3 \text{ dL} \quad = \quad \text{L} \quad \text{dL}$$

$$\textcircled{3} \quad 4 \text{ L} \quad 2 \text{ dL} \quad - \quad 2 \text{ dL} \quad = \quad \text{L}$$

$$\textcircled{4} \quad 1 \text{ L} \quad 2 \text{ dL} \quad - \quad 2 \text{ dL} \quad = \quad \text{L}$$

$$\textcircled{5} \quad 5 \text{ L} \quad 8 \text{ dL} \quad - \quad 3 \text{ dL} \quad = \quad \text{L} \quad \text{dL}$$



① かさのたんいをけい算しよう。


① 2 L 8 dL - 8 dL = L

② 9 L 6 dL - 2 dL = L dL

③ 5 L 8 dL - 1 dL = L dL

④ 3 L 3 dL - 2 dL = L dL

⑤ 8 L 8 dL - 5 dL = L dL



① かさのたんいをけい算しよう。

$$\textcircled{1} \quad 4 \text{ L} \quad 4 \text{ dL} \quad - \quad 4 \text{ dL} \quad = \quad \text{L}$$

$$\textcircled{2} \quad 8 \text{ L} \quad 5 \text{ dL} \quad - \quad 3 \text{ dL} \quad = \quad \text{L} \quad \text{dL}$$

$$\textcircled{3} \quad 7 \text{ L} \quad 7 \text{ dL} \quad - \quad 1 \text{ dL} \quad = \quad \text{L} \quad \text{dL}$$

$$\textcircled{4} \quad 4 \text{ L} \quad 6 \text{ dL} \quad - \quad 6 \text{ dL} \quad = \quad \text{L}$$

$$\textcircled{5} \quad 8 \text{ L} \quad 5 \text{ dL} \quad - \quad 2 \text{ dL} \quad = \quad \text{L} \quad \text{dL}$$



① かさのたんいをけい算しよう。

$$\textcircled{1} \quad 3 \text{ L} \quad 8 \text{ dL} \quad - \quad 1 \text{ dL} \quad = \quad \text{L} \quad \text{dL}$$

$$\textcircled{2} \quad 9 \text{ L} \quad 3 \text{ dL} \quad - \quad 1 \text{ dL} \quad = \quad \text{L} \quad \text{dL}$$

$$\textcircled{3} \quad 2 \text{ L} \quad 7 \text{ dL} \quad - \quad 2 \text{ dL} \quad = \quad \text{L} \quad \text{dL}$$

$$\textcircled{4} \quad 2 \text{ L} \quad 9 \text{ dL} \quad - \quad 9 \text{ dL} \quad = \quad \text{L}$$

$$\textcircled{5} \quad 7 \text{ L} \quad 2 \text{ dL} \quad - \quad 2 \text{ dL} \quad = \quad \text{L}$$



① かさのたんいをけい算しよう。


$$\textcircled{1} \quad 1 \text{ L} \quad 2 \text{ dL} \quad - \quad 2 \text{ dL} \quad = \quad \text{L}$$

$$\textcircled{2} \quad 5 \text{ L} \quad 2 \text{ dL} \quad - \quad 2 \text{ dL} \quad = \quad \text{L}$$

$$\textcircled{3} \quad 3 \text{ L} \quad 4 \text{ dL} \quad - \quad 1 \text{ dL} \quad = \quad \text{L} \quad \text{dL}$$

$$\textcircled{4} \quad 2 \text{ L} \quad 9 \text{ dL} \quad - \quad 1 \text{ dL} \quad = \quad \text{L} \quad \text{dL}$$

$$\textcircled{5} \quad 9 \text{ L} \quad 3 \text{ dL} \quad - \quad 2 \text{ dL} \quad = \quad \text{L} \quad \text{dL}$$



① かさのたんいをけい算しよう。

① 2 L 7 dL - 4 dL =            L            dL

② 5 L 3 dL - 1 dL =            L            dL

③ 3 L 3 dL - 3 dL =            L

④ 4 L 5 dL - 2 dL =            L            dL

⑤ 6 L 8 dL - 1 dL =            L            dL



① かさのたんいをけい算しよう。


① 1 L 9 dL - 2 dL =            L            dL

② 9 L 7 dL - 7 dL =            L

③ 8 L 9 dL - 1 dL =            L            dL

④ 3 L 7 dL - 7 dL =            L

⑤ 7 L 2 dL - 1 dL =            L            dL





① かさのたんいをけい算しよう。


① 2 L 2 dL - 2 dL = L

② 9 L 5 dL - 5 dL = L

③ 3 L 2 dL - 2 dL = L

④ 4 L 5 dL - 2 dL = L dL

⑤ 8 L 7 dL - 1 dL = L dL



① かさのたんいをけい算しよう。

① 1 L 3 dL - 2 dL =          L          dL

② 8 L 8 dL - 1 dL =          L          dL

③ 4 L 9 dL - 1 dL =          L          dL

④ 1 L 2 dL - 2 dL =          L

⑤ 5 L 9 dL - 3 dL =          L          dL



① かさのたんいをけい算しよう。


① 4 L 7 dL - 2 dL =            L            dL

② 6 L 8 dL - 8 dL =            L

③ 9 L 6 dL - 3 dL =            L            dL

④ 3 L 4 dL - 3 dL =            L            dL

⑤ 5 L 9 dL - 7 dL =            L            dL







① かさのたんいをけい算しよう。


① 4 L 9 dL - 2 dL =            L            dL

② 7 L 5 dL - 2 dL =            L            dL

③ 1 L 9 dL - 4 dL =            L            dL

④ 2 L 6 dL - 6 dL =            L

⑤ 5 L 8 dL - 5 dL =            L            dL





① かさのたんいをけい算しよう。

$$\textcircled{1} \quad 2 \text{ L} \quad 2 \text{ dL} \quad - \quad 1 \text{ dL} \quad = \quad \text{L} \quad \text{dL}$$

$$\textcircled{2} \quad 6 \text{ L} \quad 3 \text{ dL} \quad - \quad 3 \text{ dL} \quad = \quad \text{L}$$

$$\textcircled{3} \quad 6 \text{ L} \quad 4 \text{ dL} \quad - \quad 1 \text{ dL} \quad = \quad \text{L} \quad \text{dL}$$

$$\textcircled{4} \quad 5 \text{ L} \quad 4 \text{ dL} \quad - \quad 1 \text{ dL} \quad = \quad \text{L} \quad \text{dL}$$

$$\textcircled{5} \quad 5 \text{ L} \quad 9 \text{ dL} \quad - \quad 1 \text{ dL} \quad = \quad \text{L} \quad \text{dL}$$



④ ①  
5 2  
3 1  
⑤ ②  
5 6  
8 3

こたえ



① かさのたんいをけい算しよう。


① 4 L 9 dL - 5 dL =          L          dL

② 6 L 6 dL - 2 dL =          L          dL

③ 8 L 8 dL - 3 dL =          L          dL

④ 4 L 5 dL - 4 dL =          L          dL

⑤ 7 L 2 dL - 1 dL =          L          dL



① かさのたんいをけい算しよう。


① 3 L 3 dL - 3 dL = L

② 7 L 2 dL - 1 dL = L dL

③ 8 L 6 dL - 2 dL = L dL

④ 2 L 4 dL - 4 dL = L

⑤ 5 L 3 dL - 1 dL = L dL



① かさのたんいをけい算しよう。


$$\textcircled{1} \quad 4 \text{ L} \quad 3 \text{ dL} \quad - \quad 3 \text{ dL} \quad = \quad \text{L}$$

$$\textcircled{2} \quad 6 \text{ L} \quad 9 \text{ dL} \quad - \quad 2 \text{ dL} \quad = \quad \text{L} \quad \text{dL}$$

$$\textcircled{3} \quad 9 \text{ L} \quad 3 \text{ dL} \quad - \quad 2 \text{ dL} \quad = \quad \text{L} \quad \text{dL}$$

$$\textcircled{4} \quad 1 \text{ L} \quad 8 \text{ dL} \quad - \quad 1 \text{ dL} \quad = \quad \text{L} \quad \text{dL}$$

$$\textcircled{5} \quad 9 \text{ L} \quad 7 \text{ dL} \quad - \quad 4 \text{ dL} \quad = \quad \text{L} \quad \text{dL}$$





① かさのたんいをけい算しよう。


① 4 L 3 dL - 3 dL = L

② 7 L 3 dL - 3 dL = L

③ 3 L 2 dL - 1 dL = L dL

④ 1 L 4 dL - 1 dL = L dL

⑤ 8 L 6 dL - 6 dL = L



1

かさのたんいをけい算しよう。

① 1 L 3 dL - 3 dL = L


② 5 L 4 dL - 3 dL = L dL

③ 6 L 6 dL - 3 dL = L dL

④ 4 L 7 dL - 1 dL = L dL

⑤ 7 L 2 dL - 2 dL = L

じこひょうか



90

かさのたんい(6)

こたえ

④ ①

4 1

6

⑤ ②

7 5

- 1

③ 6

6

3