

① かさのたんいをけい算しよう。


① 4 L 4 dL - 1 L 3 dL = L dL

② 6 L 9 dL - 6 L 2 dL = dL

③ 7 L 6 dL - 3 L 4 dL = L dL

④ 6 L 2 dL - 2 L 1 dL = L dL

⑤ 6 L 7 dL - 3 L 4 dL = L dL

じこひょうか		
		

① かさのたんいをけい算しよう。


$$\textcircled{1} \quad 6 \text{ L} \quad 8 \text{ dL} - 1 \text{ L} \quad 3 \text{ dL} = \quad \text{L} \quad \text{dL}$$

$$\textcircled{2} \quad 6 \text{ L} \quad 4 \text{ dL} - 6 \text{ L} \quad 2 \text{ dL} = \quad \text{dL}$$

$$\textcircled{3} \quad 9 \text{ L} \quad 5 \text{ dL} - 2 \text{ L} \quad 3 \text{ dL} = \quad \text{L} \quad \text{dL}$$

$$\textcircled{4} \quad 8 \text{ L} \quad 8 \text{ dL} - 1 \text{ L} \quad 2 \text{ dL} = \quad \text{L} \quad \text{dL}$$

$$\textcircled{5} \quad 8 \text{ L} \quad 9 \text{ dL} - 1 \text{ L} \quad 2 \text{ dL} = \quad \text{L} \quad \text{dL}$$



① かさのたんいをけい算しよう。


$$\textcircled{1} \quad 4 \text{ L} \quad 7 \text{ dL} - 1 \text{ L} \quad 4 \text{ dL} = \quad \text{L} \quad \text{dL}$$

$$\textcircled{2} \quad 6 \text{ L} \quad 6 \text{ dL} - 4 \text{ L} \quad 5 \text{ dL} = \quad \text{L} \quad \text{dL}$$

$$\textcircled{3} \quad 7 \text{ L} \quad 6 \text{ dL} - 6 \text{ L} \quad 1 \text{ dL} = \quad \text{L} \quad \text{dL}$$

$$\textcircled{4} \quad 3 \text{ L} \quad 8 \text{ dL} - 3 \text{ L} \quad 4 \text{ dL} = \quad \text{dL}$$

$$\textcircled{5} \quad 8 \text{ L} \quad 3 \text{ dL} - 3 \text{ L} \quad 2 \text{ dL} = \quad \text{L} \quad \text{dL}$$



こたえ

④ ①
3 3
4 3
⑤ ②
5 2
— ③
5

① かさのたんいをけい算しよう。


$$\textcircled{1} \quad 5 \text{ L} \quad 8 \text{ dL} - 2 \text{ L} \quad 4 \text{ dL} = \quad \text{L} \quad \text{dL}$$

$$\textcircled{2} \quad 6 \text{ L} \quad 3 \text{ dL} - 6 \text{ L} \quad 1 \text{ dL} = \quad \text{dL}$$

$$\textcircled{3} \quad 3 \text{ L} \quad 3 \text{ dL} - 1 \text{ L} \quad 1 \text{ dL} = \quad \text{L} \quad \text{dL}$$

$$\textcircled{4} \quad 7 \text{ L} \quad 6 \text{ dL} - 4 \text{ L} \quad 4 \text{ dL} = \quad \text{L} \quad \text{dL}$$

$$\textcircled{5} \quad 8 \text{ L} \quad 3 \text{ dL} - 3 \text{ L} \quad 1 \text{ dL} = \quad \text{L} \quad \text{dL}$$



① かさのたんいをけい算しよう。


$$\textcircled{1} \quad 5 \text{ L} \quad 2 \text{ dL} - 4 \text{ L} \quad 2 \text{ dL} = \quad \text{L}$$

$$\textcircled{2} \quad 5 \text{ L} \quad 7 \text{ dL} - 5 \text{ L} \quad 4 \text{ dL} = \quad \text{dL}$$

$$\textcircled{3} \quad 8 \text{ L} \quad 8 \text{ dL} - 7 \text{ L} \quad 2 \text{ dL} = \quad \text{L} \quad \text{dL}$$

$$\textcircled{4} \quad 8 \text{ L} \quad 5 \text{ dL} - 3 \text{ L} \quad 3 \text{ dL} = \quad \text{L} \quad \text{dL}$$

$$\textcircled{5} \quad 9 \text{ L} \quad 9 \text{ dL} - 9 \text{ L} \quad 3 \text{ dL} = \quad \text{dL}$$



① かさのたんいをけい算しよう。

$$\textcircled{1} \quad 2 \text{ L} \quad 8 \text{ dL} \quad - \quad 1 \text{ L} \quad 2 \text{ dL} \quad = \quad \text{L} \quad \text{dL}$$

$$\textcircled{2} \quad 9 \text{ L} \quad 4 \text{ dL} \quad - \quad 5 \text{ L} \quad 3 \text{ dL} \quad = \quad \text{L} \quad \text{dL}$$

$$\textcircled{3} \quad 3 \text{ L} \quad 7 \text{ dL} \quad - \quad 1 \text{ L} \quad 2 \text{ dL} \quad = \quad \text{L} \quad \text{dL}$$

$$\textcircled{4} \quad 8 \text{ L} \quad 4 \text{ dL} \quad - \quad 1 \text{ L} \quad 2 \text{ dL} \quad = \quad \text{L} \quad \text{dL}$$

$$\textcircled{5} \quad 6 \text{ L} \quad 5 \text{ dL} \quad - \quad 2 \text{ L} \quad 1 \text{ dL} \quad = \quad \text{L} \quad \text{dL}$$

じこひょうか		
		

① かさのたんいをけい算しよう。



$$\textcircled{1} \quad 3 \text{ L } 7 \text{ dL} - 1 \text{ L } 5 \text{ dL} = \quad \text{L} \quad \text{dL}$$

$$\textcircled{2} \quad 9 \text{ L } 7 \text{ dL} - 9 \text{ L } 3 \text{ dL} = \quad \text{dL}$$

$$\textcircled{3} \quad 9 \text{ L } 6 \text{ dL} - 4 \text{ L } 3 \text{ dL} = \quad \text{L} \quad \text{dL}$$

$$\textcircled{4} \quad 8 \text{ L } 3 \text{ dL} - 2 \text{ L } 2 \text{ dL} = \quad \text{L} \quad \text{dL}$$

$$\textcircled{5} \quad 7 \text{ L } 6 \text{ dL} - 1 \text{ L } 5 \text{ dL} = \quad \text{L} \quad \text{dL}$$

じこひょうか		
		

① ① ② ③ ④ ⑤

① ② ③ ④ ⑤

① ② ③ ④ ⑤

① ② ③ ④ ⑤

① ② ③ ④ ⑤

① ② ③ ④ ⑤

かさのたんいをけい算しよう。


$$\textcircled{1} \quad 4 \text{ L} \quad 7 \text{ dL} \quad - \quad 3 \text{ L} \quad 2 \text{ dL} \quad = \quad \text{L} \quad \text{dL}$$

$$\textcircled{2} \quad 7 \text{ L} \quad 7 \text{ dL} \quad - \quad 6 \text{ L} \quad 6 \text{ dL} \quad = \quad \text{L} \quad \text{dL}$$

$$\textcircled{3} \quad 6 \text{ L} \quad 3 \text{ dL} \quad - \quad 2 \text{ L} \quad 2 \text{ dL} \quad = \quad \text{L} \quad \text{dL}$$

$$\textcircled{4} \quad 2 \text{ L} \quad 3 \text{ dL} \quad - \quad 1 \text{ L} \quad 2 \text{ dL} \quad = \quad \text{L} \quad \text{dL}$$

$$\textcircled{5} \quad 8 \text{ L} \quad 6 \text{ dL} \quad - \quad 1 \text{ L} \quad 3 \text{ dL} \quad = \quad \text{L} \quad \text{dL}$$



① かさのたんいをけい算しよう。


$$\textcircled{1} \quad 3 \text{ L} \quad 7 \text{ dL} - 1 \text{ L} \quad 1 \text{ dL} = \quad \text{L} \quad \text{dL}$$

$$\textcircled{2} \quad 6 \text{ L} \quad 3 \text{ dL} - 5 \text{ L} \quad 1 \text{ dL} = \quad \text{L} \quad \text{dL}$$

$$\textcircled{3} \quad 9 \text{ L} \quad 8 \text{ dL} - 8 \text{ L} \quad 5 \text{ dL} = \quad \text{L} \quad \text{dL}$$

$$\textcircled{4} \quad 4 \text{ L} \quad 8 \text{ dL} - 3 \text{ L} \quad 4 \text{ dL} = \quad \text{L} \quad \text{dL}$$

$$\textcircled{5} \quad 8 \text{ L} \quad 6 \text{ dL} - 4 \text{ L} \quad 3 \text{ dL} = \quad \text{L} \quad \text{dL}$$



① かさのたんいをけい算しよう。


$$\textcircled{1} \quad 5 \text{ L} \quad 4 \text{ dL} \quad - \quad 3 \text{ L} \quad 1 \text{ dL} \quad = \quad \text{L} \quad \text{dL}$$

$$\textcircled{2} \quad 6 \text{ L} \quad 4 \text{ dL} \quad - \quad 1 \text{ L} \quad 3 \text{ dL} \quad = \quad \text{L} \quad \text{dL}$$

$$\textcircled{3} \quad 4 \text{ L} \quad 5 \text{ dL} \quad - \quad 3 \text{ L} \quad 5 \text{ dL} \quad = \quad \text{L}$$

$$\textcircled{4} \quad 4 \text{ L} \quad 4 \text{ dL} \quad - \quad 4 \text{ L} \quad 2 \text{ dL} \quad = \quad \text{dL}$$

$$\textcircled{5} \quad 6 \text{ L} \quad 5 \text{ dL} \quad - \quad 4 \text{ L} \quad 2 \text{ dL} \quad = \quad \text{L} \quad \text{dL}$$



1 ① かさのたんいをけい算しよう。


$$\textcircled{1} \quad 6 \text{ L} \quad 2 \text{ dL} \quad - \quad 4 \text{ L} \quad 2 \text{ dL} \quad = \quad \text{L}$$

$$\textcircled{2} \quad 5 \text{ L} \quad 4 \text{ dL} \quad - \quad 1 \text{ L} \quad 3 \text{ dL} \quad = \quad \text{L} \quad \text{dL}$$

$$\textcircled{3} \quad 4 \text{ L} \quad 6 \text{ dL} \quad - \quad 2 \text{ L} \quad 3 \text{ dL} \quad = \quad \text{L} \quad \text{dL}$$

$$\textcircled{4} \quad 5 \text{ L} \quad 7 \text{ dL} \quad - \quad 5 \text{ L} \quad 1 \text{ dL} \quad = \quad \text{dL}$$

$$\textcircled{5} \quad 9 \text{ L} \quad 9 \text{ dL} \quad - \quad 3 \text{ L} \quad 4 \text{ dL} \quad = \quad \text{L} \quad \text{dL}$$



① かさのたんいをけい算しよう。


$$\textcircled{1} \quad 3 \text{ L} \quad 4 \text{ dL} - 1 \text{ L} \quad 1 \text{ dL} = \quad \text{L} \quad \text{dL}$$

$$\textcircled{2} \quad 5 \text{ L} \quad 7 \text{ dL} - 4 \text{ L} \quad 1 \text{ dL} = \quad \text{L} \quad \text{dL}$$

$$\textcircled{3} \quad 9 \text{ L} \quad 6 \text{ dL} - 5 \text{ L} \quad 6 \text{ dL} = \quad \text{L}$$

$$\textcircled{4} \quad 2 \text{ L} \quad 6 \text{ dL} - 2 \text{ L} \quad 4 \text{ dL} = \quad \text{dL}$$

$$\textcircled{5} \quad 8 \text{ L} \quad 4 \text{ dL} - 2 \text{ L} \quad 1 \text{ dL} = \quad \text{L} \quad \text{dL}$$



① かさのたんいをけい算しよう。


$$\textcircled{1} \quad 6 \text{ L} \quad 2 \text{ dL} \quad - \quad 1 \text{ L} \quad 2 \text{ dL} \quad = \quad \text{L}$$

$$\textcircled{2} \quad 7 \text{ L} \quad 6 \text{ dL} \quad - \quad 4 \text{ L} \quad 5 \text{ dL} \quad = \quad \text{L} \quad \text{dL}$$

$$\textcircled{3} \quad 8 \text{ L} \quad 3 \text{ dL} \quad - \quad 4 \text{ L} \quad 1 \text{ dL} \quad = \quad \text{L} \quad \text{dL}$$

$$\textcircled{4} \quad 7 \text{ L} \quad 4 \text{ dL} \quad - \quad 2 \text{ L} \quad 2 \text{ dL} \quad = \quad \text{L} \quad \text{dL}$$

$$\textcircled{5} \quad 8 \text{ L} \quad 8 \text{ dL} \quad - \quad 7 \text{ L} \quad 4 \text{ dL} \quad = \quad \text{L} \quad \text{dL}$$



1

かさのたんいをけい算しよう。


① $4 \text{ L } 6 \text{ dL} - 2 \text{ L } 1 \text{ dL} = \quad \text{L} \quad \text{dL}$

② $8 \text{ L } 7 \text{ dL} - 3 \text{ L } 4 \text{ dL} = \quad \text{L} \quad \text{dL}$

③ $4 \text{ L } 5 \text{ dL} - 2 \text{ L } 4 \text{ dL} = \quad \text{L} \quad \text{dL}$

④ $8 \text{ L } 5 \text{ dL} - 5 \text{ L } 3 \text{ dL} = \quad \text{L} \quad \text{dL}$

⑤ $7 \text{ L } 5 \text{ dL} - 2 \text{ L } 1 \text{ dL} = \quad \text{L} \quad \text{dL}$

じこひょうか		
		

① かさのたんいをけい算しよう。


$$\textcircled{1} \quad 6 \text{ L} \quad 8 \text{ dL} \quad - \quad 2 \text{ L} \quad 5 \text{ dL} \quad = \quad \text{L} \quad \text{dL}$$

$$\textcircled{2} \quad 7 \text{ L} \quad 6 \text{ dL} \quad - \quad 5 \text{ L} \quad 3 \text{ dL} \quad = \quad \text{L} \quad \text{dL}$$

$$\textcircled{3} \quad 3 \text{ L} \quad 8 \text{ dL} \quad - \quad 1 \text{ L} \quad 4 \text{ dL} \quad = \quad \text{L} \quad \text{dL}$$

$$\textcircled{4} \quad 7 \text{ L} \quad 6 \text{ dL} \quad - \quad 6 \text{ L} \quad 5 \text{ dL} \quad = \quad \text{L} \quad \text{dL}$$

$$\textcircled{5} \quad 9 \text{ L} \quad 2 \text{ dL} \quad - \quad 3 \text{ L} \quad 1 \text{ dL} \quad = \quad \text{L} \quad \text{dL}$$



1 ① かさのたんいをけい算しよう。

$$\textcircled{1} \quad 5 \text{ L} \quad 9 \text{ dL} \quad - \quad 2 \text{ L} \quad 9 \text{ dL} \quad = \quad \text{L}$$

$$\textcircled{2} \quad 8 \text{ L} \quad 6 \text{ dL} \quad - \quad 2 \text{ L} \quad 5 \text{ dL} \quad = \quad \text{L} \quad \text{dL}$$

$$\textcircled{3} \quad 5 \text{ L} \quad 6 \text{ dL} \quad - \quad 2 \text{ L} \quad 3 \text{ dL} \quad = \quad \text{L} \quad \text{dL}$$

$$\textcircled{4} \quad 8 \text{ L} \quad 5 \text{ dL} \quad - \quad 5 \text{ L} \quad 2 \text{ dL} \quad = \quad \text{L} \quad \text{dL}$$

$$\textcircled{5} \quad 8 \text{ L} \quad 3 \text{ dL} \quad - \quad 4 \text{ L} \quad 1 \text{ dL} \quad = \quad \text{L} \quad \text{dL}$$



① かさのたんいをけい算しよう。

$$\textcircled{1} \quad 5 \text{ L} \quad 5 \text{ dL} - 3 \text{ L} \quad 2 \text{ dL} = \quad \text{L} \quad \text{dL}$$

$$\textcircled{2} \quad 7 \text{ L} \quad 2 \text{ dL} - 3 \text{ L} \quad 1 \text{ dL} = \quad \text{L} \quad \text{dL}$$

$$\textcircled{3} \quad 8 \text{ L} \quad 3 \text{ dL} - 1 \text{ L} \quad 1 \text{ dL} = \quad \text{L} \quad \text{dL}$$

$$\textcircled{4} \quad 4 \text{ L} \quad 9 \text{ dL} - 3 \text{ L} \quad 5 \text{ dL} = \quad \text{L} \quad \text{dL}$$

$$\textcircled{5} \quad 8 \text{ L} \quad 9 \text{ dL} - 6 \text{ L} \quad 3 \text{ dL} = \quad \text{L} \quad \text{dL}$$



① かさのたんいをけい算しよう。


$$\textcircled{1} \quad 5 \text{ L } 9 \text{ dL} - 4 \text{ L } 1 \text{ dL} = \quad \text{L} \quad \text{dL}$$

$$\textcircled{2} \quad 9 \text{ L } 4 \text{ dL} - 1 \text{ L } 1 \text{ dL} = \quad \text{L} \quad \text{dL}$$

$$\textcircled{3} \quad 6 \text{ L } 9 \text{ dL} - 4 \text{ L } 7 \text{ dL} = \quad \text{L} \quad \text{dL}$$

$$\textcircled{4} \quad 8 \text{ L } 7 \text{ dL} - 6 \text{ L } 5 \text{ dL} = \quad \text{L} \quad \text{dL}$$

$$\textcircled{5} \quad 9 \text{ L } 6 \text{ dL} - 1 \text{ L } 1 \text{ dL} = \quad \text{L} \quad \text{dL}$$



④ ①
2 1
2 8
⑤ ②
8 8
5 3
2 2
③

こたえ

① かさのたんいをけい算しよう。


$$\textcircled{1} \quad 2 \text{ L} \quad 8 \text{ dL} - 1 \text{ L} \quad 4 \text{ dL} = \quad \text{L} \quad \text{dL}$$

$$\textcircled{2} \quad 8 \text{ L} \quad 4 \text{ dL} - 5 \text{ L} \quad 2 \text{ dL} = \quad \text{L} \quad \text{dL}$$

$$\textcircled{3} \quad 4 \text{ L} \quad 6 \text{ dL} - 2 \text{ L} \quad 2 \text{ dL} = \quad \text{L} \quad \text{dL}$$

$$\textcircled{4} \quad 8 \text{ L} \quad 3 \text{ dL} - 3 \text{ L} \quad 1 \text{ dL} = \quad \text{L} \quad \text{dL}$$

$$\textcircled{5} \quad 7 \text{ L} \quad 6 \text{ dL} - 1 \text{ L} \quad 4 \text{ dL} = \quad \text{L} \quad \text{dL}$$



① かさのたんいをけい算しよう。




$$\textcircled{1} \quad 6 \text{ L} \quad 4 \text{ dL} \quad - \quad 1 \text{ L} \quad 1 \text{ dL} \quad = \quad \text{L} \quad \text{dL}$$

$$\textcircled{2} \quad 6 \text{ L} \quad 9 \text{ dL} \quad - \quad 3 \text{ L} \quad 7 \text{ dL} \quad = \quad \text{L} \quad \text{dL}$$

$$\textcircled{3} \quad 4 \text{ L} \quad 3 \text{ dL} \quad - \quad 2 \text{ L} \quad 1 \text{ dL} \quad = \quad \text{L} \quad \text{dL}$$

$$\textcircled{4} \quad 2 \text{ L} \quad 6 \text{ dL} \quad - \quad 2 \text{ L} \quad 5 \text{ dL} \quad = \quad \text{dL}$$

$$\textcircled{5} \quad 8 \text{ L} \quad 9 \text{ dL} \quad - \quad 3 \text{ L} \quad 6 \text{ dL} \quad = \quad \text{L} \quad \text{dL}$$

じこひょうか		
		

① かさのたんいをけい算しよう。


$$\textcircled{1} \quad 5 \text{ L} \quad 6 \text{ dL} - 1 \text{ L} \quad 6 \text{ dL} = \quad \text{L}$$

$$\textcircled{2} \quad 6 \text{ L} \quad 5 \text{ dL} - 5 \text{ L} \quad 2 \text{ dL} = \quad \text{L} \quad \text{dL}$$

$$\textcircled{3} \quad 4 \text{ L} \quad 9 \text{ dL} - 3 \text{ L} \quad 7 \text{ dL} = \quad \text{L} \quad \text{dL}$$

$$\textcircled{4} \quad 5 \text{ L} \quad 8 \text{ dL} - 3 \text{ L} \quad 6 \text{ dL} = \quad \text{L} \quad \text{dL}$$

$$\textcircled{5} \quad 6 \text{ L} \quad 5 \text{ dL} - 2 \text{ L} \quad 2 \text{ dL} = \quad \text{L} \quad \text{dL}$$



① かさのたんいをけい算しよう。


$$\textcircled{1} \quad 3 \text{ L} \quad 5 \text{ dL} - 1 \text{ L} \quad 4 \text{ dL} = \quad \text{L} \quad \text{dL}$$

$$\textcircled{2} \quad 8 \text{ L} \quad 8 \text{ dL} - 8 \text{ L} \quad 3 \text{ dL} = \quad \text{dL}$$

$$\textcircled{3} \quad 7 \text{ L} \quad 7 \text{ dL} - 1 \text{ L} \quad 1 \text{ dL} = \quad \text{L} \quad \text{dL}$$

$$\textcircled{4} \quad 7 \text{ L} \quad 8 \text{ dL} - 4 \text{ L} \quad 7 \text{ dL} = \quad \text{L} \quad \text{dL}$$

$$\textcircled{5} \quad 7 \text{ L} \quad 4 \text{ dL} - 1 \text{ L} \quad 2 \text{ dL} = \quad \text{L} \quad \text{dL}$$



① かさのたんいをけい算しよう。

$$\textcircled{1} \quad 2 \text{ L } 7 \text{ dL} - 1 \text{ L } 6 \text{ dL} = \quad \text{L} \quad \text{dL}$$

$$\textcircled{2} \quad 6 \text{ L } 3 \text{ dL} - 6 \text{ L } 1 \text{ dL} = \quad \text{dL}$$

$$\textcircled{3} \quad 7 \text{ L } 8 \text{ dL} - 2 \text{ L } 1 \text{ dL} = \quad \text{L} \quad \text{dL}$$

$$\textcircled{4} \quad 2 \text{ L } 5 \text{ dL} - 1 \text{ L } 4 \text{ dL} = \quad \text{L} \quad \text{dL}$$

$$\textcircled{5} \quad 8 \text{ L } 7 \text{ dL} - 6 \text{ L } 2 \text{ dL} = \quad \text{L} \quad \text{dL}$$



① かさのたんいをけい算しよう。


$$\textcircled{1} \quad 2 \text{ L } 7 \text{ dL } - 1 \text{ L } 7 \text{ dL } = \quad \text{L}$$

$$\textcircled{2} \quad 8 \text{ L } 4 \text{ dL } - 7 \text{ L } 1 \text{ dL } = \quad \text{L} \quad \text{dL}$$

$$\textcircled{3} \quad 5 \text{ L } 5 \text{ dL } - 4 \text{ L } 2 \text{ dL } = \quad \text{L} \quad \text{dL}$$

$$\textcircled{4} \quad 6 \text{ L } 8 \text{ dL } - 6 \text{ L } 3 \text{ dL } = \quad \text{dL}$$

$$\textcircled{5} \quad 7 \text{ L } 4 \text{ dL } - 4 \text{ L } 1 \text{ dL } = \quad \text{L} \quad \text{dL}$$



① かさのたんいをけい算しよう。


$$\textcircled{1} \quad 4 \text{ L} \quad 5 \text{ dL} \quad - \quad 3 \text{ L} \quad 5 \text{ dL} \quad = \quad \text{L}$$

$$\textcircled{2} \quad 9 \text{ L} \quad 5 \text{ dL} \quad - \quad 1 \text{ L} \quad 3 \text{ dL} \quad = \quad \text{L} \quad \text{dL}$$

$$\textcircled{3} \quad 3 \text{ L} \quad 8 \text{ dL} \quad - \quad 2 \text{ L} \quad 5 \text{ dL} \quad = \quad \text{L} \quad \text{dL}$$

$$\textcircled{4} \quad 2 \text{ L} \quad 3 \text{ dL} \quad - \quad 1 \text{ L} \quad 1 \text{ dL} \quad = \quad \text{L} \quad \text{dL}$$

$$\textcircled{5} \quad 6 \text{ L} \quad 7 \text{ dL} \quad - \quad 3 \text{ L} \quad 4 \text{ dL} \quad = \quad \text{L} \quad \text{dL}$$



① かさのたんいをけい算しよう。


$$\textcircled{1} \quad 3 \text{ L} \quad 9 \text{ dL} \quad - \quad 2 \text{ L} \quad 5 \text{ dL} \quad = \quad \text{L} \quad \text{dL}$$

$$\textcircled{2} \quad 6 \text{ L} \quad 2 \text{ dL} \quad - \quad 1 \text{ L} \quad 1 \text{ dL} \quad = \quad \text{L} \quad \text{dL}$$

$$\textcircled{3} \quad 6 \text{ L} \quad 7 \text{ dL} \quad - \quad 4 \text{ L} \quad 7 \text{ dL} \quad = \quad \text{L}$$

$$\textcircled{4} \quad 8 \text{ L} \quad 2 \text{ dL} \quad - \quad 1 \text{ L} \quad 1 \text{ dL} \quad = \quad \text{L} \quad \text{dL}$$

$$\textcircled{5} \quad 7 \text{ L} \quad 7 \text{ dL} \quad - \quad 2 \text{ L} \quad 2 \text{ dL} \quad = \quad \text{L} \quad \text{dL}$$



□ 1 かさのたんいをけい算しよう。


① 3 L 5 dL - 2 L 4 dL = L dL

② 7 L 2 dL - 2 L 1 dL = L dL

③ 4 L 8 dL - 3 L 4 dL = L dL

④ 6 L 9 dL - 4 L 5 dL = L dL

⑤ 9 L 9 dL - 6 L 4 dL = L dL



① かさのたんいをけい算しよう。


$$\textcircled{1} \quad 4 \text{ L} \quad 4 \text{ dL} \quad - \quad 1 \text{ L} \quad 4 \text{ dL} \quad = \quad \text{L}$$

$$\textcircled{2} \quad 6 \text{ L} \quad 2 \text{ dL} \quad - \quad 6 \text{ L} \quad 1 \text{ dL} \quad = \quad \text{dL}$$

$$\textcircled{3} \quad 5 \text{ L} \quad 6 \text{ dL} \quad - \quad 3 \text{ L} \quad 3 \text{ dL} \quad = \quad \text{L} \quad \text{dL}$$

$$\textcircled{4} \quad 5 \text{ L} \quad 3 \text{ dL} \quad - \quad 2 \text{ L} \quad 2 \text{ dL} \quad = \quad \text{L} \quad \text{dL}$$

$$\textcircled{5} \quad 7 \text{ L} \quad 2 \text{ dL} \quad - \quad 5 \text{ L} \quad 1 \text{ dL} \quad = \quad \text{L} \quad \text{dL}$$



1 ① かさのたんいをけい算しよう。

① 5 L 4 dL - 4 L 2 dL = L dL

② 5 L 3 dL - 4 L 1 dL = L dL

③ 4 L 7 dL - 1 L 3 dL = L dL

④ 5 L 6 dL - 3 L 4 dL = L dL

⑤ 9 L 4 dL - 7 L 2 dL = L dL



① かさのたんいをけい算しよう。

$$\textcircled{1} \quad 2 \text{ L } 7 \text{ dL} - 1 \text{ L } 2 \text{ dL} = \quad \text{L} \quad \text{dL}$$

$$\textcircled{2} \quad 7 \text{ L } 2 \text{ dL} - 4 \text{ L } 1 \text{ dL} = \quad \text{L} \quad \text{dL}$$

$$\textcircled{3} \quad 3 \text{ L } 8 \text{ dL} - 2 \text{ L } 8 \text{ dL} = \quad \text{L}$$

$$\textcircled{4} \quad 7 \text{ L } 5 \text{ dL} - 7 \text{ L } 4 \text{ dL} = \quad \text{dL}$$

$$\textcircled{5} \quad 9 \text{ L } 6 \text{ dL} - 1 \text{ L } 3 \text{ dL} = \quad \text{L} \quad \text{dL}$$

じこひょうか		
	