

1

なが  
長さのたんいをけい算しよう。


① 3 cm 3 mm + 6 mm =          cm          mm

② 5 cm 1 mm + 6 mm =          cm          mm

③ 7 cm 6 mm + 2 mm =          cm          mm

④ 3 cm 1 mm + 8 mm =          cm          mm

⑤ 5 cm 4 mm + 4 mm =          cm          mm



1

なが  
長さのたんいをけい算しよう。


① 2 cm 8 mm + 1 mm =          cm          mm

② 7 cm 3 mm + 3 mm =          cm          mm

③ 8 cm 5 mm + 2 mm =          cm          mm

④ 4 cm 4 mm + 3 mm =          cm          mm

⑤ 7 cm 6 mm + 3 mm =          cm          mm



① <sup>なが</sup>長さのたんいをけい算<sup>さん</sup>しよう。


① 4 cm 2 mm + 5 mm =          cm          mm

② 9 cm 2 mm + 1 mm =          cm          mm

③ 5 cm 6 mm + 2 mm =          cm          mm

④ 5 cm 6 mm + 2 mm =          cm          mm

⑤ 9 cm 3 mm + 5 mm =          cm          mm



1

なが  
長さのたんいをけい算しよう。

① 1 cm 7 mm + 1 mm =          cm          mm

② 9 cm 3 mm + 4 mm =          cm          mm

③ 1 cm 6 mm + 1 mm =          cm          mm

④ 1 cm 6 mm + 2 mm =          cm          mm

⑤ 5 cm 7 mm + 1 mm =          cm          mm



① <sup>なが</sup>長さのたんいをけい算<sup>さん</sup>しよう。


① 2 cm 8 mm + 1 mm =          cm          mm

② 9 cm 5 mm + 1 mm =          cm          mm

③ 4 cm 5 mm + 2 mm =          cm          mm

④ 5 cm 2 mm + 4 mm =          cm          mm

⑤ 8 cm 7 mm + 2 mm =          cm          mm



1

なが  
長さのたんいをけい算しよう。


① 4 cm 6 mm + 3 mm =          cm          mm

② 7 cm 3 mm + 2 mm =          cm          mm

③ 5 cm 2 mm + 5 mm =          cm          mm

④ 1 cm 7 mm + 1 mm =          cm          mm

⑤ 8 cm 5 mm + 2 mm =          cm          mm



① <sup>なが</sup>長さのたんいをけい算<sup>さん</sup>しよう。


① 1 cm 2 mm + 7 mm =            cm            mm

② 9 cm 2 mm + 3 mm =            cm            mm

③ 7 cm 6 mm + 1 mm =            cm            mm

④ 5 cm 2 mm + 1 mm =            cm            mm

⑤ 8 cm 4 mm + 4 mm =            cm            mm



1

なが  
長さのたんいをけい算しよう。

① 3 cm 5 mm + 1 mm =          cm          mm

② 6 cm 3 mm + 3 mm =          cm          mm

③ 1 cm 2 mm + 3 mm =          cm          mm

④ 5 cm 1 mm + 8 mm =          cm          mm

⑤ 5 cm 5 mm + 1 mm =          cm          mm





① <sup>なが</sup>長さのたんいをけい算<sup>さん</sup>しよう。


① 3 cm 3 mm + 4 mm =          cm          mm

② 7 cm 2 mm + 5 mm =          cm          mm

③ 8 cm 5 mm + 3 mm =          cm          mm

④ 5 cm 1 mm + 8 mm =          cm          mm

⑤ 8 cm 4 mm + 4 mm =          cm          mm



1

なが  
長さのたんいをけい算しよう。


① 1 cm 5 mm + 4 mm =          cm          mm

② 5 cm 2 mm + 6 mm =          cm          mm

③ 8 cm 6 mm + 2 mm =          cm          mm

④ 5 cm 5 mm + 3 mm =          cm          mm

⑤ 8 cm 8 mm + 1 mm =          cm          mm



① <sup>なが</sup>長さのたんいをけい算<sup>さん</sup>しよう。


① 4 cm 5 mm + 3 mm =          cm          mm

② 6 cm 3 mm + 5 mm =          cm          mm

③ 8 cm 2 mm + 6 mm =          cm          mm

④ 2 cm 6 mm + 2 mm =          cm          mm

⑤ 7 cm 3 mm + 3 mm =          cm          mm



① <sup>なが</sup>長さのたんいをけい算<sup>さん</sup>しよう。


① 3 cm 8 mm + 1 mm =          cm          mm

② 5 cm 1 mm + 4 mm =          cm          mm

③ 4 cm 4 mm + 1 mm =          cm          mm

④ 4 cm 5 mm + 4 mm =          cm          mm

⑤ 5 cm 7 mm + 1 mm =          cm          mm



① <sup>なが</sup>長さのたんいをけい算しよう。


① 3 cm 7 mm + 2 mm =          cm          mm

② 5 cm 3 mm + 6 mm =          cm          mm

③ 7 cm 6 mm + 2 mm =          cm          mm

④ 2 cm 5 mm + 2 mm =          cm          mm

⑤ 6 cm 6 mm + 1 mm =          cm          mm



① <sup>なが</sup>長さのたんいをけい算<sup>さん</sup>しよう。


① 4 cm 1 mm + 1 mm =          cm          mm

② 9 cm 5 mm + 4 mm =          cm          mm

③ 2 cm 2 mm + 5 mm =          cm          mm

④ 1 cm 7 mm + 2 mm =          cm          mm

⑤ 9 cm 6 mm + 1 mm =          cm          mm



① <sup>なが</sup>長さのたんいをけい算しよう。


① 3 cm 5 mm + 2 mm =          cm          mm

② 6 cm 4 mm + 2 mm =          cm          mm

③ 4 cm 6 mm + 3 mm =          cm          mm

④ 1 cm 6 mm + 1 mm =          cm          mm

⑤ 6 cm 4 mm + 4 mm =          cm          mm



① <sup>なが</sup>長さのたんいをけい算<sup>さん</sup>しよう。


① 3 cm 8 mm + 1 mm =          cm          mm

② 7 cm 4 mm + 1 mm =          cm          mm

③ 7 cm 4 mm + 4 mm =          cm          mm

④ 2 cm 7 mm + 2 mm =          cm          mm

⑤ 7 cm 2 mm + 1 mm =          cm          mm





① <sup>なが</sup>長さのたんいをけい算<sup>さん</sup>しよう。


① 4 cm 2 mm + 2 mm =          cm          mm

② 7 cm 2 mm + 6 mm =          cm          mm

③ 4 cm 5 mm + 1 mm =          cm          mm

④ 3 cm 4 mm + 2 mm =          cm          mm

⑤ 9 cm 8 mm + 1 mm =          cm          mm



① <sup>なが</sup>長さのたんいをけい算<sup>さん</sup>しよう。


① 3 cm 2 mm + 3 mm =          cm          mm

② 7 cm 2 mm + 6 mm =          cm          mm

③ 7 cm 6 mm + 2 mm =          cm          mm

④ 3 cm 3 mm + 1 mm =          cm          mm

⑤ 7 cm 7 mm + 2 mm =          cm          mm



① <sup>なが</sup>長さのたんいをけい算<sup>さん</sup>しよう。


① 4 cm 5 mm + 4 mm =          cm          mm

② 8 cm 5 mm + 4 mm =          cm          mm

③ 3 cm 6 mm + 1 mm =          cm          mm

④ 1 cm 4 mm + 5 mm =          cm          mm

⑤ 9 cm 2 mm + 1 mm =          cm          mm



1

なが  
長さのたんいをけい算しよう。


① 4 cm 8 mm + 1 mm =          cm          mm

② 8 cm 5 mm + 4 mm =          cm          mm

③ 6 cm 5 mm + 3 mm =          cm          mm

④ 5 cm 3 mm + 4 mm =          cm          mm

⑤ 6 cm 5 mm + 4 mm =          cm          mm



1

なが  
長さのたんいをけい算しよう。

① 4 cm 4 mm + 2 mm =          cm          mm

② 6 cm 2 mm + 2 mm =          cm          mm

③ 7 cm 5 mm + 4 mm =          cm          mm

④ 4 cm 2 mm + 6 mm =          cm          mm

⑤ 6 cm 7 mm + 2 mm =          cm          mm



① <sup>なが</sup>長さのたんいをけい算<sup>さん</sup>しよう。

① 4 cm 1 mm + 8 mm =          cm          mm

② 7 cm 4 mm + 2 mm =          cm          mm

③ 9 cm 3 mm + 5 mm =          cm          mm

④ 3 cm 7 mm + 1 mm =          cm          mm

⑤ 8 cm 7 mm + 1 mm =          cm          mm



① <sup>なが</sup>長さのたんいをけい算<sup>さん</sup>しよう。


① 1 cm 6 mm + 2 mm =          cm          mm

② 8 cm 2 mm + 4 mm =          cm          mm

③ 9 cm 5 mm + 3 mm =          cm          mm

④ 4 cm 2 mm + 4 mm =          cm          mm

⑤ 9 cm 3 mm + 5 mm =          cm          mm



① <sup>なが</sup>長さのたんいをけい算<sup>さん</sup>しよう。

① 4 cm 7 mm + 2 mm =          cm          mm

② 9 cm 1 mm + 2 mm =          cm          mm

③ 1 cm 5 mm + 3 mm =          cm          mm

④ 4 cm 1 mm + 3 mm =          cm          mm

⑤ 5 cm 3 mm + 2 mm =          cm          mm





① <sup>なが</sup>長さのたんいをけい算<sup>さん</sup>しよう。


① 4 cm 8 mm + 1 mm =          cm          mm

② 7 cm 1 mm + 6 mm =          cm          mm

③ 4 cm 4 mm + 4 mm =          cm          mm

④ 3 cm 5 mm + 2 mm =          cm          mm

⑤ 9 cm 3 mm + 2 mm =          cm          mm



① <sup>なが</sup>長さのたんいをけい算<sup>さん</sup>しよう。


① 1 cm 8 mm + 1 mm =          cm          mm

② 5 cm 2 mm + 1 mm =          cm          mm

③ 3 cm 3 mm + 4 mm =          cm          mm

④ 3 cm 5 mm + 2 mm =          cm          mm

⑤ 5 cm 4 mm + 3 mm =          cm          mm



① <sup>なが</sup>長さのたんいをけい算<sup>さん</sup>しよう。


① 2 cm 7 mm + 2 mm =          cm          mm

② 9 cm 4 mm + 3 mm =          cm          mm

③ 7 cm 5 mm + 3 mm =          cm          mm

④ 3 cm 1 mm + 7 mm =          cm          mm

⑤ 7 cm 6 mm + 3 mm =          cm          mm



① <sup>なが</sup>長さのたんいをけい算<sup>さん</sup>しよう。


① 4 cm 6 mm + 1 mm =            cm            mm

② 9 cm 4 mm + 3 mm =            cm            mm

③ 4 cm 2 mm + 6 mm =            cm            mm

④ 3 cm 7 mm + 1 mm =            cm            mm

⑤ 9 cm 6 mm + 2 mm =            cm            mm



① <sup>なが</sup>長さのたんいをけい算<sup>さん</sup>しよう。


① 3 cm 3 mm + 5 mm =            cm            mm

② 6 cm 2 mm + 3 mm =            cm            mm

③ 4 cm 5 mm + 4 mm =            cm            mm

④ 1 cm 1 mm + 3 mm =            cm            mm

⑤ 6 cm 4 mm + 3 mm =            cm            mm



1

なが  
長さのたんいをけい算しよう。

① 4 cm 6 mm + 2 mm =          cm          mm

② 9 cm 4 mm + 5 mm =          cm          mm

③ 8 cm 3 mm + 5 mm =          cm          mm

④ 2 cm 1 mm + 4 mm =          cm          mm

⑤ 9 cm 8 mm + 1 mm =          cm          mm

